

Please make sure that you print this resource at 100% so that all measurements are correct.

To do this, follow the relevant steps below.

Adobe Reader or Adobe Acrobat

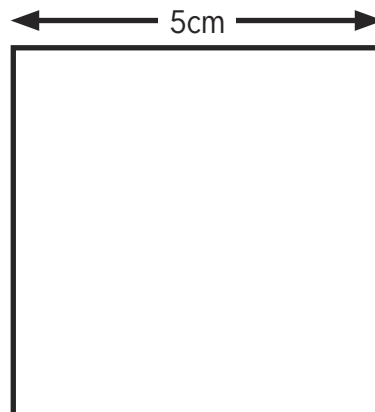
- Adobe Reader is a free PDF viewer, from Adobe. To install a copy of Adobe Reader, go to <https://get.adobe.com/uk/reader/>.
- Once Adobe Reader is installed, open your PDF.
- Go to File>Print.
- Under 'Page Sizing & Handling', select 'Size'.
- From here, make sure that 'Actual Size' is selected.
- Print this page as a test, making sure that the shape below is the correct size once printed.
- If the test print is correct, print your PDF.

Foxit Reader

- Go to File>Print.
- Set the 'Scaling' to 'None'.
- Print this page as a test, making sure that the shape below is the correct size once printed.
- If the test print is correct, print your PDF.

Web Browser

- If printing from a web browser, such as Chrome, Firefox or Microsoft Edge make sure that your printer is set to print at 100%, either by unticking 'Fit to Page' or selecting 'Actual Size'.
- Print this page as a test, making sure that the shape below is the correct size once printed.
- If the test print is correct, print your PDF.





Measuring Perimeter

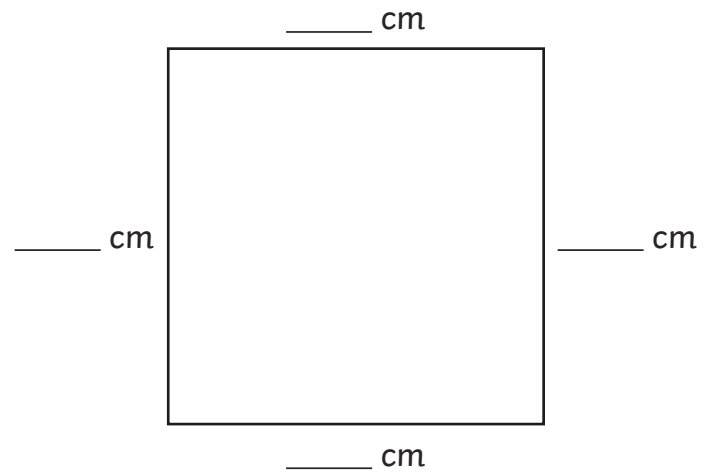
I can calculate the perimeter of a shape in centimetres.



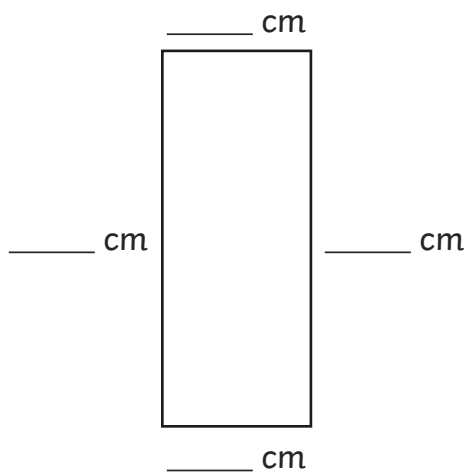
1) Measure and label the sides and calculate the perimeter of these shapes:



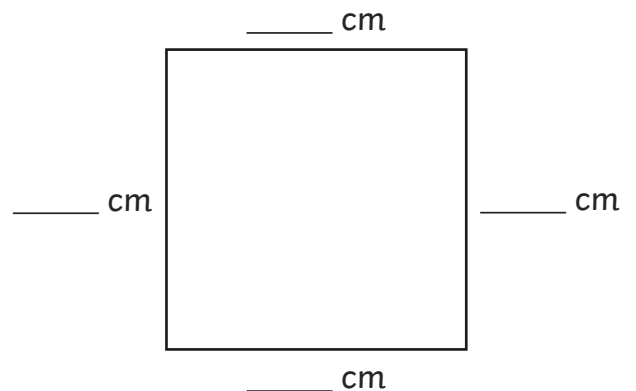
a) perimeter _____ cm



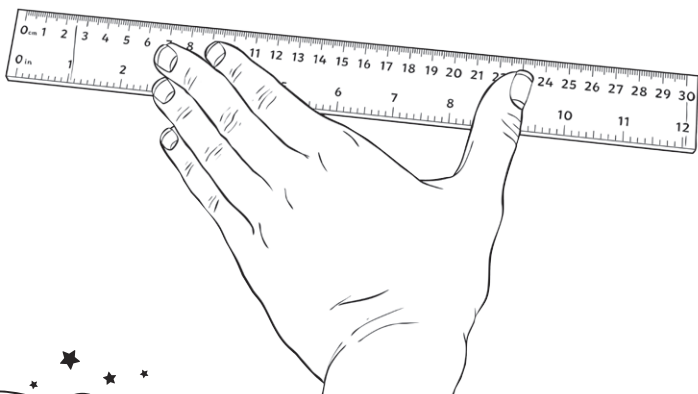
b) perimeter _____ cm



c) perimeter _____ cm

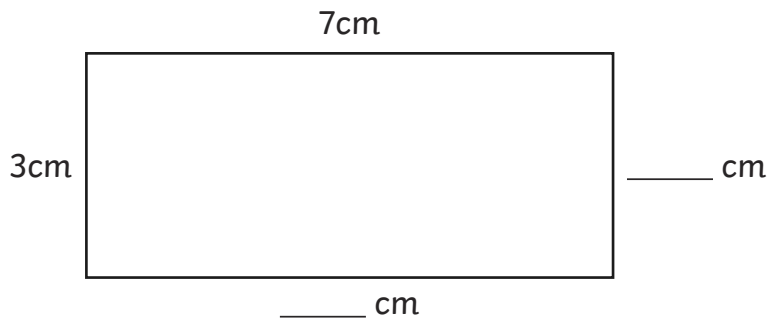


d) perimeter _____ cm

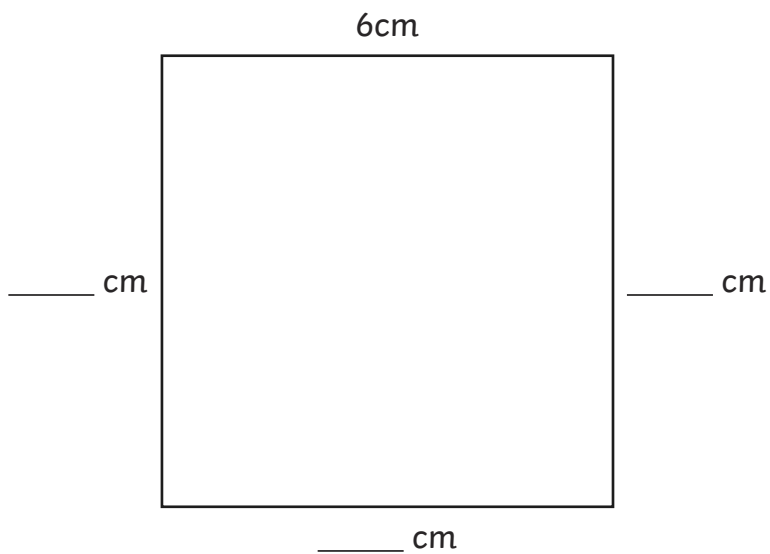




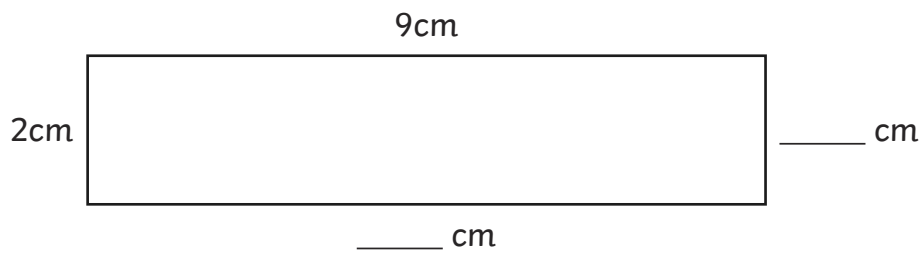
2) Work out the length of all sides and the perimeter. Write the measurement for missing sides.



a) perimeter ___ cm



b) perimeter ___ cm



c) perimeter ___ cm



Measuring Perimeter Answers

I can calculate the perimeter of a shape in centimetres.



Question	Answer
1.	Measure and label the sides and calculate the perimeter of these shapes:
a	height 3cm width 5cm perimeter 16cm
b	height 5cm width 5cm perimeter 20cm
c	height 5cm width 2cm perimeter 14cm
d	height 4cm width 4cm perimeter 16cm
2.	Work out the length of all sides and the perimeter. Write the measurement for missing sides.
a	missing height 3cm missing width 7cm perimeter 20cm
b	missing height 6cm missing width 6cm perimeter 24cm
c	missing height 2cm missing width 9cm perimeter 22cm

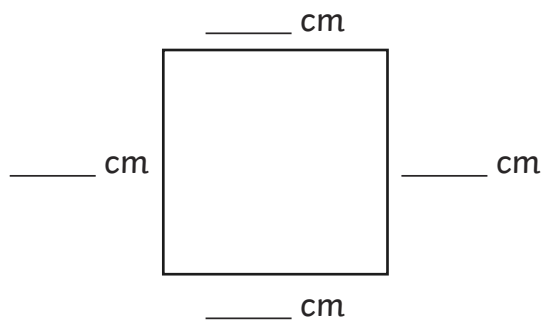
Measuring Perimeter

I can calculate the perimeter of a shape in centimetres.

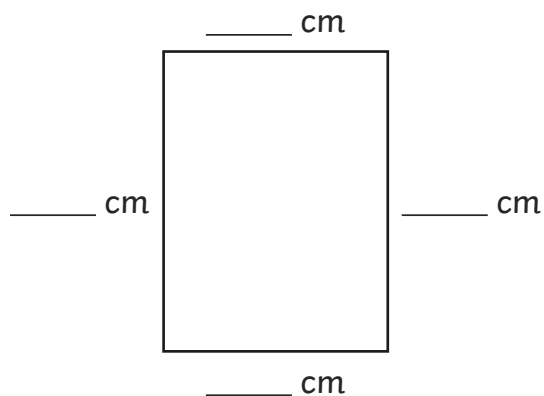
1) Measure and label the sides and calculate the perimeter of these shapes:



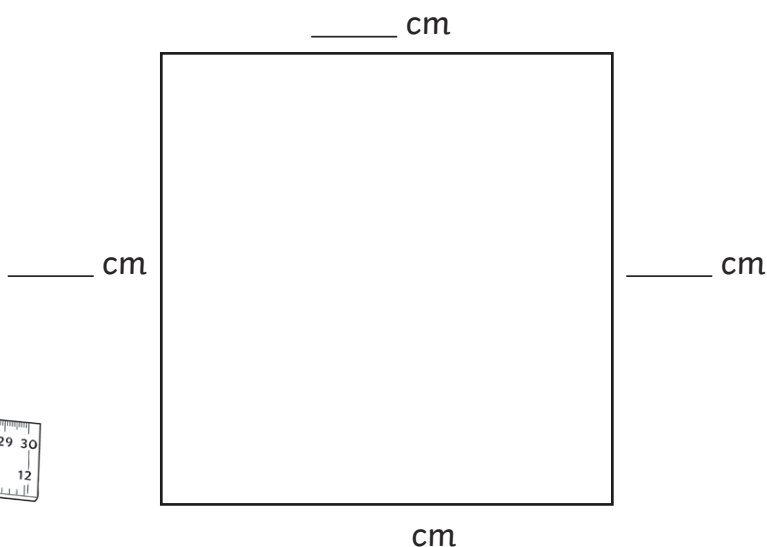
a) perimeter _____ cm



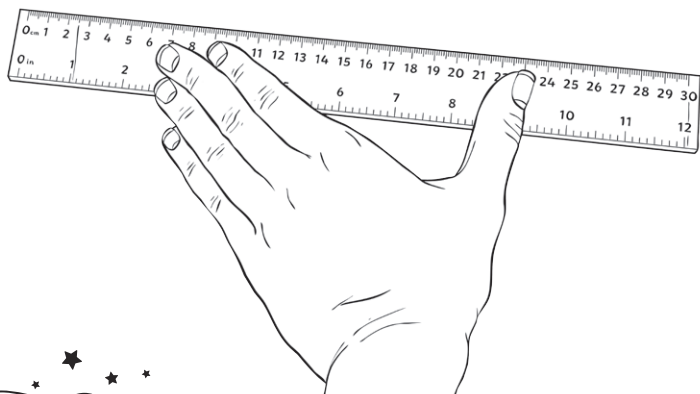
b) perimeter _____ cm



c) perimeter _____ cm

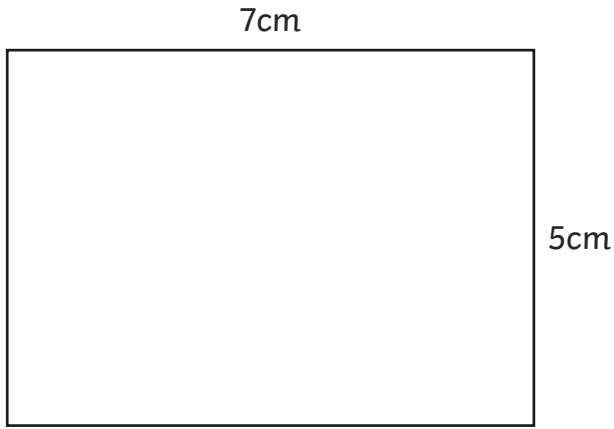


d) perimeter _____ cm

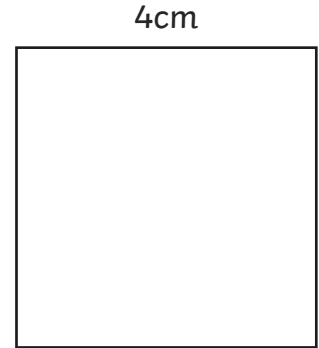




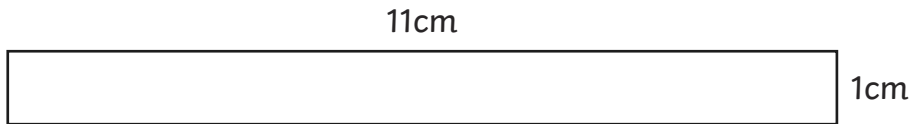
2) Calculate the perimeters of these rectangles and squares:



a) perimeter _____ cm



b) perimeter _____ cm



c) perimeter _____ cm



Measuring Perimeter Answers

I can calculate the perimeter of a shape in centimetres.



Question	Answer
1.	Measure and label the sides and calculate the perimeter of these shapes:
a	height 2cm width 4cm perimeter 12cm
b	height 3cm width 3cm perimeter 12cm
c	height 4cm width 3cm perimeter 14cm
d	height 6cm width 6cm perimeter 24cm
2.	Calculate the perimeters of these rectangles and squares:
a	perimeter 24cm
b	perimeter 16cm
c	perimeter 24cm

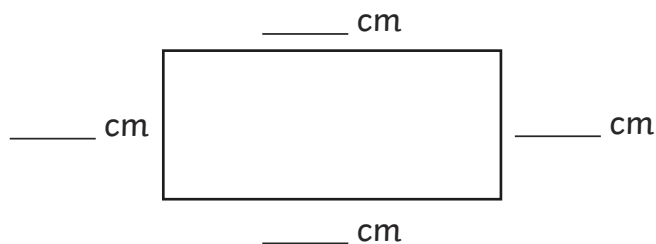


Measuring Perimeter

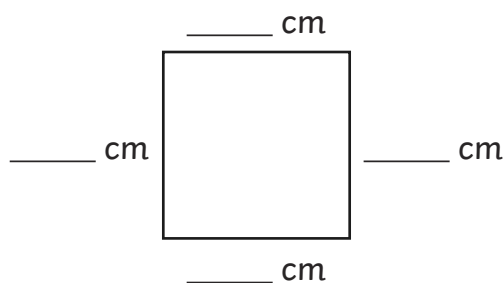
I can calculate the perimeter of a shape in centimetres.



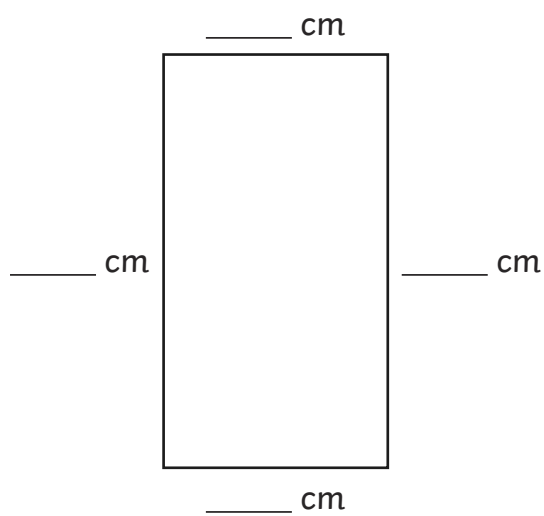
1) Measure and label the sides and calculate the perimeter of these shapes:



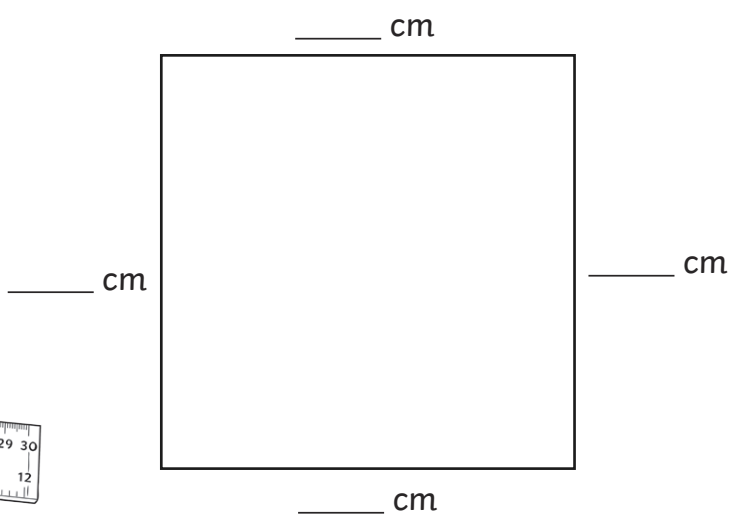
a) perimeter _____ cm



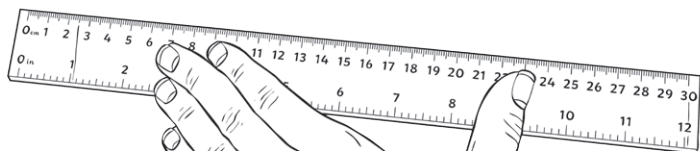
b) perimeter _____ cm



c) perimeter _____ cm

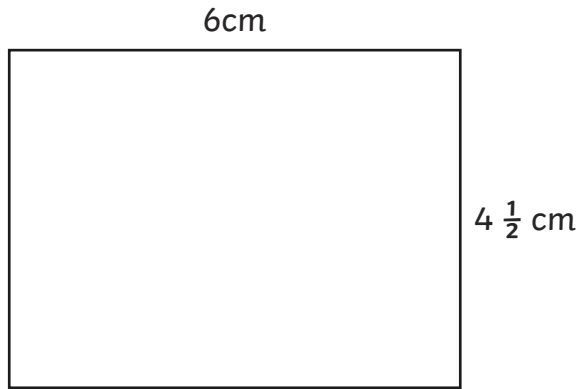


d) perimeter _____ cm

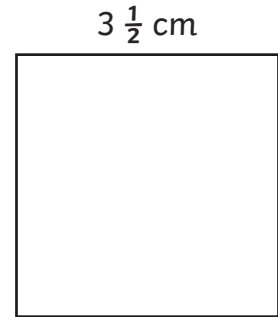




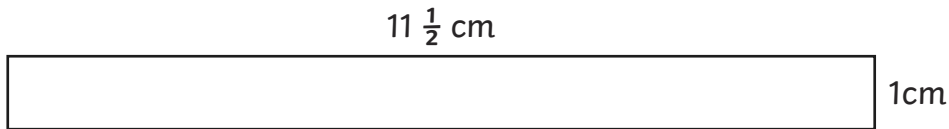
2) Calculate the perimeters of these rectangles and squares:



a) perimeter _____ cm



b) perimeter _____ cm



c) perimeter _____ cm



Measuring Perimeter Answers

I can calculate the perimeter of a shape in centimetres.



Question	Answer
1.	Measure and label the sides and calculate the perimeter of these shapes:
a	height 2cm width 4 ½ cm perimeter 13cm
b	height 2 ½ cm width 2 ½ cm perimeter 10cm
c	height 5 ½ cm width 3cm perimeter 17cm
d	height 5 ½ cm width 5 ½ cm perimeter 22cm
2.	Calculate the perimeters of these rectangles and squares:
a	perimeter 21cm
b	perimeter 14cm
c	perimeter 25cm